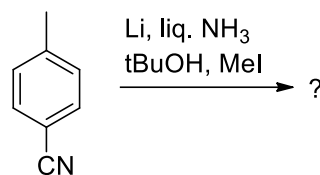
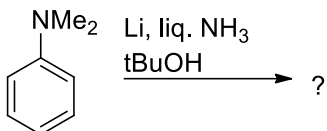
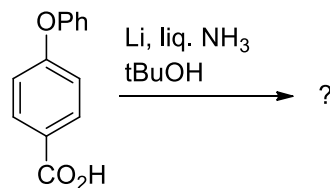
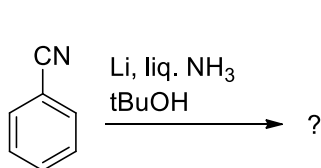
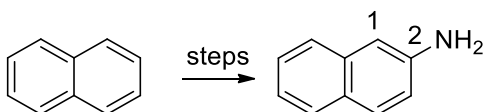


1. Draw the products formed in the shown reactions?



2. Propose a synthesis of 2-naphthylamine from naphthalene. Hint: You need 2 steps. You can't address directly the 2-position, why?



3. What is the expected product?

What is the name of the transformation?

